


Chapter 2

1. In a standard normal distribution, what proportion of values are above 0.8?

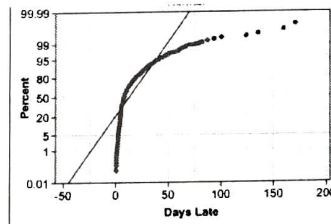
- a. 0.25
- b. 0.16
- c. 0.788
- d. 0.212
- e. 0.68

2. Which of the following data sets could be normally distributed?

a. The length of a commuter's daily travel, with a mean of 14 minutes and a median of 12.



b. This dotplot:

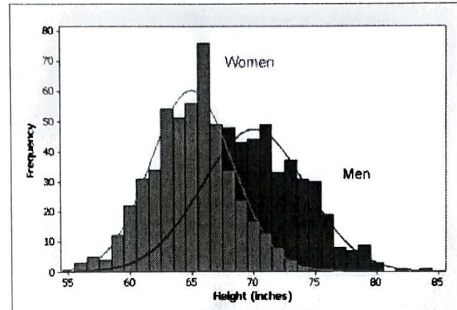


c. This normal probability plot:

d. A test where a student in the 84th percentile scored 76%, given that the mean is 64% and the standard deviation is 12%

e. The weights of newly hatched birds, whose distribution is heavily skewed right.

1. The following histogram shows heights for men and women. Average height for men is 70 inches with a standard deviation of 4. Average height for women is 65 inches with a standard deviation of 3.5 inches.



- a. Sarah and Tom are both 68 inches tall. What are their z-scores?

 - b. What percentiles do Sarah and Tom fall into?

 - c. Who is taller for their gender? Explain.

 - d. If the doctors who created the above data set did not measure correctly, and accidentally reported heights that were two inches taller than accurate, what would the real means and standard deviations of the data be?
2. A recent test taken by a math class had a mean score of 84 and a standard deviation of 8.5.
- a. What would a student have to score to be in the 90th percentile or higher?

b. What proportion of the students scored below a 75%?